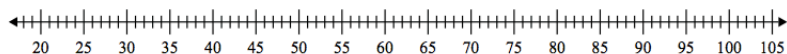


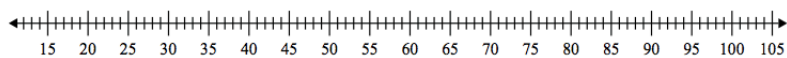
## ESERCIZI

Dopo aver calcolato il minimo, il massimo, la mediana, il primo e il terzo quartile dei seguenti insiemi di dati, tracciare i boxplot che rappresentano sulla retta numerica tali distribuzioni:

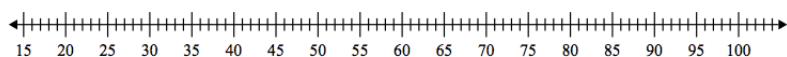
- 1) 45, 88, 37, 67, 91, 60, 23



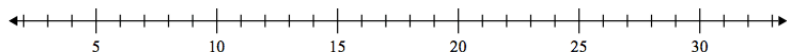
- 2) 40, 33, 63, 25, 91, 47, 80, 35, 30, 46, 57, 98



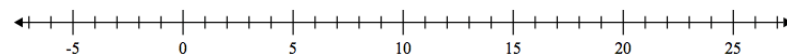
- 3) 53, 36, 57, 76, 49, 68, 25, 68, 23, 94, 42



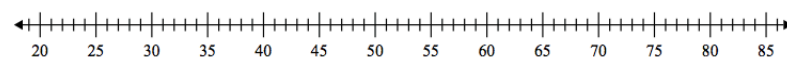
- 4) 20, 18, 14, 15, 11, 13, 7



- 5) 6, 16, 8, 13, 9, 7, 18



- 6) 31, 79, 56, 61, 54, 70, 43, 24, 80, 40



- 7) 19, 10, 13, 16, 14, 16

